



Cambridge IGCSE™

CANDIDATE
NAME

CENTRE
NUMBER

--	--	--	--	--

CANDIDATE
NUMBER

--	--	--	--

ENVIRONMENTAL MANAGEMENT

0680/12

Paper 1 Theory

October/November 2021

1 hour 45 minutes

You must answer on the question paper.

No additional materials are needed.

INSTRUCTIONS

- Answer **all** questions.
- Use a black or dark blue pen. You may use an HB pencil for any diagrams or graphs.
- Write your name, centre number and candidate number in the boxes at the top of the page.
- Write your answer to each question in the space provided.
- Do **not** use an erasable pen or correction fluid.
- Do **not** write on any bar codes.
- You may use a calculator.
- You should show all your working and use appropriate units.

INFORMATION

- The total mark for this paper is 80.
- The number of marks for each question or part question is shown in brackets [].

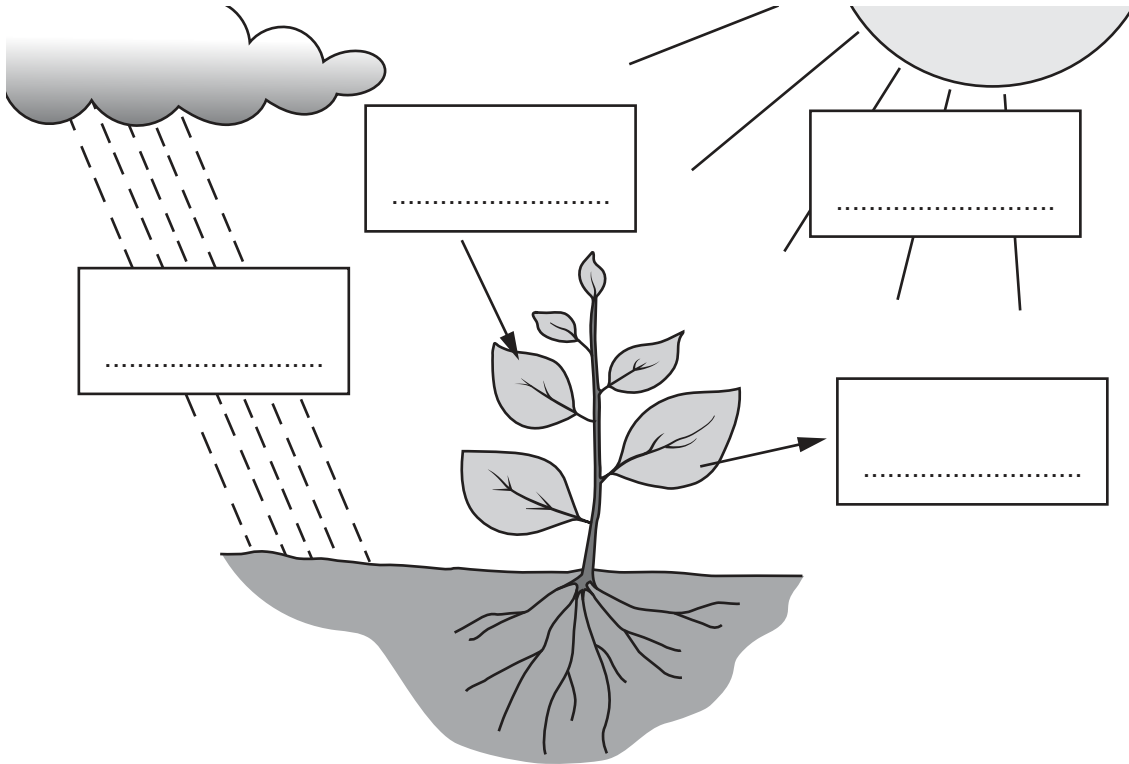
This document has **20** pages. Any blank pages are indicated.



Section A

1 Green plants produce glucose by a process called photosynthesis.

The diagram shows the process of photosynthesis. The diagram is **not** complete.



(a) Complete the diagram by adding the words to the boxes.

carbon dioxide oxygen sunlight water [2]

(b) State the name of the green pigment in the leaves of green plants.

..... [1]

(c) State the name of the process in plants that **uses** glucose.

..... [1]

(d) Explain why crop yield increases when plants are grown in greenhouses.

.....

 [2]

[Total: 6]

2 The photograph shows a large area of farmland.



(a) Circle the type of agriculture shown in the photograph.

commercial
arable

subsistence
arable

commercial
pastoral

subsistence
pastoral

[1]

(b) Crop yield can be increased by improving irrigation methods.

State **two** other methods of increasing crop yield.

1

2

[2]

(c) State **two** ways of damaging soil by the mismanagement of irrigation.

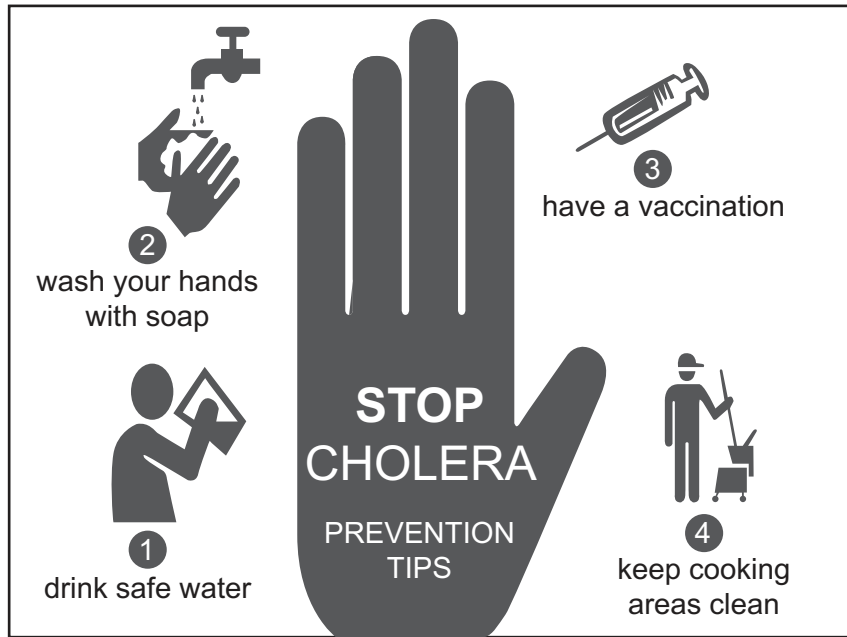
1

2

[2]

[Total: 5]

3 The poster shows a health campaign about preventing the spread of cholera.



(a) Explain how these prevention tips can reduce the spread of cholera.

.....

.....

.....

.....

.....

..... [3]

(b) Suggest why there are more outbreaks of cholera in less economically developed countries (LEDCs) than in more economically developed countries (MEDCs).

.....

.....

.....

..... [2]

[Total: 5]

4 The photograph shows an area of high population density in a city.



(a) Suggest **two** reasons for high population density in a city.

1

.....

2

.....

[2]

(b) State **two** strategies for managing the population size of a country.

1

.....

2

.....

[2]

[Total: 4]

Section B

5 The photograph shows a quarry where limestone is extracted.



(a) (i) State the name of the type of mining shown in the photograph.

..... [1]

(ii) Use the photograph to explain the impacts of this mine on the local environment.

.....
.....
.....
.....
.....
..... [3]

(iii) Describe how limestone rock is formed.

.....
.....
.....
..... [2]

(iv) A mining company wants to open a new mine.

Suggest factors that affect the decision of the mining company to open the mine.

.....
.....
.....
.....
.....
..... [3]

(b) Limestone is used to make cement.

The bar chart shows cement production and cement consumption in India between 2013 and 2018.

Content removed due to copyright restrictions.

(i) Identify the year with the greatest difference between production and consumption.
..... [1]

(ii) Use data from the bar chart to describe the trend in consumption of cement in India between 2013 and 2018.
.....
.....
.....
..... [2]

(iii) In 2018, 298 million tonnes of cement was produced.

Cement production was predicted to increase by 4.5% in 2019.

Calculate the predicted cement production in million tonnes for 2019.

..... million tonnes [2]

[Total: 14]

- 6 (a) Sea water contains mineral ions.

The bar chart shows the mass of some mineral ions per kilogram of sea water.

The bar chart is **not** complete.

Content removed due to copyright restrictions.

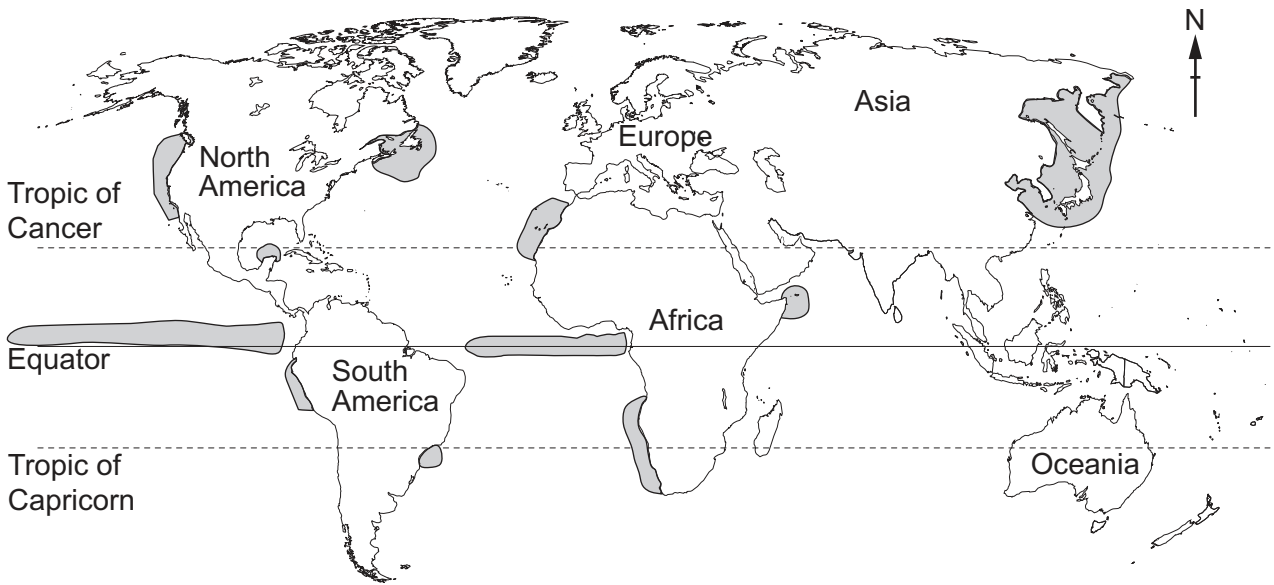
- (i) Complete the bar chart to show 3.5g of sulfate ions per kilogram of sea water. [1]
- (ii) Calculate the total mass of chloride and sodium ions in one kilogram of sea water.

total mass =g [1]

(b) The map shows some major marine fish populations.

Key

 major marine fish population



(i) Describe the distribution of major marine fish populations shown on the map.

.....
.....
.....
.....
.....
.....
..... [3]

(ii) Many of the major marine fish populations are decreasing.


Describe strategies for managing the harvesting of marine fish populations.

.....
.....
.....
.....
.....
.....
.....
.....
..... [4]


7 Water scarcity is when there is not enough fresh water to meet people's needs.

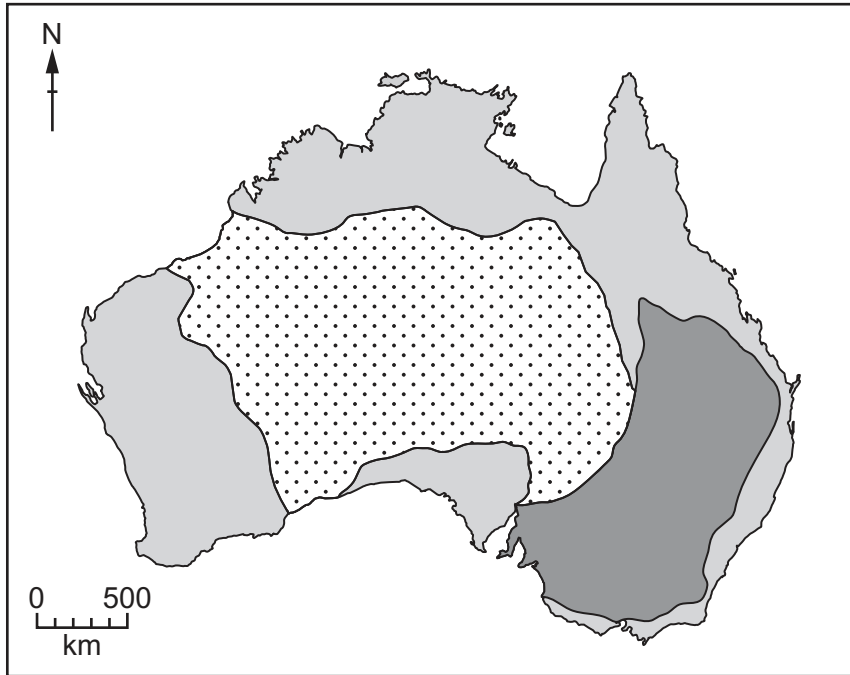
(a) The map shows water scarcity in Australia.

Key

 no water scarcity

 water scarcity

 no data available



(i) Suggest reasons why there is water scarcity in the area shown on the map.

.....

.....

.....

..... [2]

(ii) Suggest reasons why some areas of Australia have no data available.

.....

.....

.....

..... [2]

8 The table shows vehicle emissions from cars with different types of engines.

engine type	carbon dioxide /arbitrary units	carbon monoxide /arbitrary units
electric	10	22
hybrid (electric and petrol)	50	176
diesel	160	408
petrol	120	221


(a) (i) Calculate the difference in carbon monoxide emissions between a hybrid and a petrol engine.

..... [1]

(ii) Use the data to determine which engine type causes most harm to the environment.

..... [1]

(iii) On the grid, plot a bar chart of carbon **dioxide** emissions for each engine type.



[4]

(b) Suggest ways that governments can encourage the use of electric vehicles.

.....
.....
.....
.....
.....
.....
..... [3]

(c) Explain why reducing carbon dioxide emissions is of **global** importance.

.....
.....
.....
.....
.....
.....
.....
.....
..... [4]

[Total: 13]

9 A student reads a blog about nuclear power.

In 2017, 10.5% of the world's electricity was generated from 454 nuclear power stations. Nuclear power produces a lot of energy from a small mass of fuel.

Nuclear power stations use heat to produce steam to turn turbines, which drive generators. The heat comes from nuclear fission. Nuclear fission splits the nuclei of uranium atoms to release large amounts of energy.

In 2017, 38% of the world's uranium production came from Kazakhstan. This was 23 300 tonnes of uranium. Canada produced 13 100 tonnes, which was 22%, and Australia's production was 5900 tonnes, which was 10%.

(a) Fossil fuel power stations also use heat to produce steam to turn turbines.

Explain how the source of heat energy in a nuclear power station is different from the source of heat energy in a fossil fuel power station.

.....

.....

.....

..... [2]

(b) Use the blog to present the data for the percentage and mass of uranium produced in Kazakhstan, Canada and Australia in a suitable table.

[4]

BLANK PAGE

The boundaries and names shown, the designations used and the presentation of material on any maps contained in this question paper/insert do not imply official endorsement or acceptance by Cambridge Assessment International Education concerning the legal status of any country, territory, or area or any of its authorities, or of the delimitation of its frontiers or boundaries.

Permission to reproduce items where third-party owned material protected by copyright is included has been sought and cleared where possible. Every reasonable effort has been made by the publisher (UCLES) to trace copyright holders, but if any items requiring clearance have unwittingly been included, the publisher will be pleased to make amends at the earliest possible opportunity.

To avoid the issue of disclosure of answer-related information to candidates, all copyright acknowledgements are reproduced online in the Cambridge Assessment International Education Copyright Acknowledgements Booklet. This is produced for each series of examinations and is freely available to download at www.cambridgeinternational.org after the live examination series.

Cambridge Assessment International Education is part of the Cambridge Assessment Group. Cambridge Assessment is the brand name of the University of Cambridge Local Examinations Syndicate (UCLES), which itself is a department of the University of Cambridge.